


LES FRACTIONS
CORRECTION

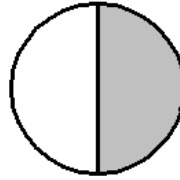
1) Écris la fraction représentée par chaque dessin.




$$\frac{1}{4}$$



$$\frac{1}{2}$$




$$\frac{1}{2}$$




$$\frac{1}{3}$$

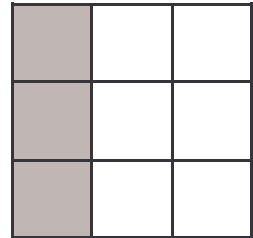
2) Même exercice.




$$\frac{20}{25}$$



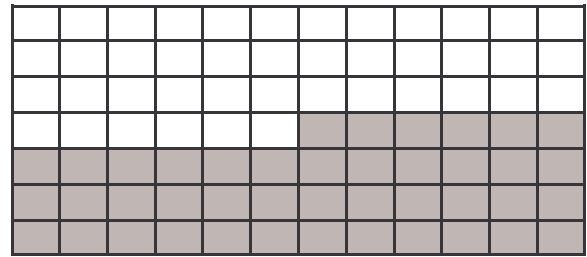
$$\frac{10}{20}$$



$$\frac{3}{9}$$




$$\frac{14}{49}$$



$$\frac{42}{84}$$


3) Colorie les figures selon la fraction.



$$\frac{3}{4}$$



$$\frac{2}{3}$$



$$\frac{4}{6}$$



$$\frac{1}{2}$$