
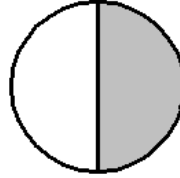



## LES FRACTIONS

**1) Écris la fraction représentée par chaque dessin.**



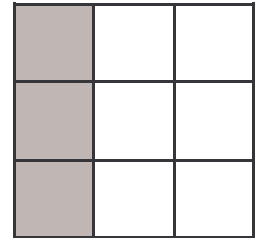


.....  
—  
.....

.....  
—  
.....

.....  
—  
.....

.....  
—  
.....

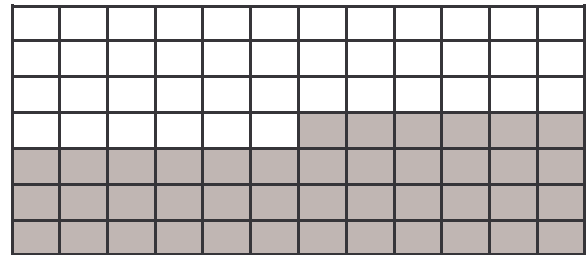
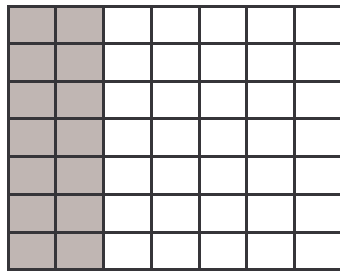
**2) Même exercice.**



○

○


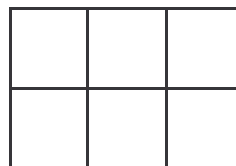
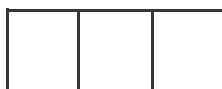
○



○

○

**3) Colorie les figures selon la fraction.**



○  $\frac{3}{4}$  ○

○  $\frac{2}{3}$  ○

○  $\frac{4}{6}$  ○

○  $\frac{1}{2}$  ○